



ব্রিলিয়ান্ট স্টারস স্কুল

(সি. বি. এস. ই. দ্বারা অনুমোদিত)

পূর্ব ধ্বজনগর, উদয়পুর, গোমতী, ত্রিপুরা, ভারত।

ষাণ্মাসিক মূল্যায়ন নমুনা পত্র

বর্ষভাগ - ২০২৪-২৫

বিষয়- বাংলা

শ্রেণী- চতুর্থ

সময়- ২ ঘণ্টা

পূর্ণমান - ৬০

-
- এই প্রশ্নপত্রের উত্তরগুলি উত্তরপত্রের মধ্যেই লিখতে হবে।
-প্রশ্নপত্রটি পড়ার জন্য প্রথম দশ মিনিট ধার্য করা আছে।
-প্রশ্নপত্রের উপরে লিখিত নির্ধারিত সময়ের মধ্যেই উত্তরগুলি লিখতে হবে।
-এই প্রশ্নপত্রে ১৩ নম্বর পর্যন্ত প্রশ্ন আছে ও মোট ৫টি পৃষ্ঠা বিদ্যমান।
-

শিক্ষার্থীর নাম _____

1. শব্দার্থ লেখো

1x4=4

পাষণ, কেরামতি, কোদাল, নাইওরি

2. বিপরীত শব্দ লেখো

1x4=4

লস্বা, প্রবেশ, জীবন, আপন

3. যেটি 'সত্য' তার পাশে 'হ্যাঁ' এবং যেটি 'মিথ্যা' তার পাশে 'না' লেখো:

1x4=4

- অ) দাদামশায়ের বন্ধু ছিলেন বাবন খাঁ।
আ) কোনো দেশের দুর্দশায় আমরা কষ্ট পায়।
ই) পাঁচ বছর বয়সে সালমার মার মৃত্যু হয়েছিল।
ঈ) 'বাংলাদেশ' কবিতাটি যোগীন্দ্রনাথ সরকারের লেখা।

4. সঠিক উত্তরটি বেছে নিয়ে লেখো:

1x4=4

- ক) আমরা পরের জিনিস কিনব না যদি -
অ) মায়ের ঘরের জিনিস পাই, আ) বিদেশী জিনিস পাই, ই) প্রচুর টাকা পাই
খ) বামুন নন্দবিলাসকে বলেছিল -
অ) বদমাশ, আ) গরু, ই) খুবভালো
গ) কবি দেশমাতাকে বলেছেন-
অ) রাজরানি, আ) দীনদুখিনি, ই) দয়াময়ী
ঘ) 'প্রার্থনা' কবিতায় যে ঋতুটির উল্লেখ নেই সেটি হল-
অ) শরৎ, আ) হেমন্ত, ই) শীত

5. এলোমেলো বর্ণগুলি সাজিয়ে শব্দ তৈরি করো এবং সেই শব্দটি দিয়ে একটি বাক্য রচনা করো: 1x4=4

গপগপ্রা, তাতাড়িড়া, মদয়য়া, শপূশীণ,

6. নিম্নলিখিত শব্দগুলির পার্থক্য লেখো:

1x4=4

দীন= _____, দিন= _____, মাথা = _____, মাতা = _____

7. নিম্নলিখিত প্রশ্নগুলির একটি বাক্যে উত্তর দাও।

1x6=6

- অ) কবি আমাদের কী মাথায় তুলে নিতে বলেছেন?
আ) বামুন হেরে গিয়ে কত টাকা খেসারত দিয়েছিল?
ই) সন্ধ্যাবেলার শাঁখ কোথায় বাজে?
ঈ) গাছে গাছে নাচে কোন পাখি?
উ) ছাগলছানাকে কে বনের ভিতর নিয়ে গিয়েছিল?
ঊ) 'প্রার্থনা' কবিতায় ভগবানকে কয়টি নামে সম্বোধন করা হয়েছিল?

8. নিম্নলিখিত প্রশ্নগুলির তিন - চারটি বাক্যে উত্তর দাও।

2x5=10

- অ) শিয়াল কীভাবে জব্দ হয়েছিল লেখো।
আ) কবি কার কাছে, কী প্রার্থনা করেছেন?
ই) বাংলাদেশের দুর্দশায় আমরা দুঃখ পাই কেন?
ঈ) ধলেশ্বরী নদীর পরিচয় দাও।
উ) বাঘ শিয়ালকে লেজের সঙ্গে বেঁধে এনেছিল কেন?

ব্যাকরণ

9. নিচের অনুচ্ছেদটি পড়ে প্রদত্ত প্রশ্নগুলোর এককথায় উত্তর লেখ:

1x4=4

বাল্যকালে নজরুল চায়ের দোকানে কাজ করেছেন। যাত্রাদলে গান লিখেও পয়সা উপার্জন করেছেন। সেনাবাহিনীতে চাকরি নিলেও বেশীদিন সেখানে স্থায়ী হন নি। প্রথম বিশ্বযুদ্ধ শেষ হলে চাকরিতে ইস্তফা দিয়ে কলকাতায় ফিরে আসেন। তখন থেকেই পাকাপাকিভাবে কবিতা লিখতে শুরু করেন। তাঁর 'বিদ্রোহী' কবিতাটি প্রকাশিত হলে বাংলাদেশে তুমুল আলোড়ন সৃষ্টি হয়।

- a) বাল্যকালে নজরুল কোথায় কাজ করেছেন?
b) যাত্রাদলে গান লিখে নজরুল কি উপার্জন করেছে?
c) নজরুল কোথায় চাকরি করেছেন?
d) কবি কাজী নজরুল ইসলামের রচিত একটি কবিতার নাম লেখ।

10. শূন্যস্থানে সঠিক পদটি বেছে নিয়ে লেখো:

1x2=2

- অ) শূনিয়া _____ বিস্মিত হইল। (তাহারা / তারা)
আ) বাসা ছেড়ে পাখিরা _____ গেল। (উড়ে / উড়িয়া)

11. সাধু ভাষা ও চলিত ভাষায় রূপান্তর করো:

1x2=2

- অ) তাহাকে আসিতে বলিয়াছি।
আ) জানালা বন্ধ করে দাও।

12. সন্ধি কত প্রকার ও কি কি?

1x2=2

13. নিচের পদগুলির একটি করে উদাহরণ দাও:

1x2=2

- অ) সংজ্ঞাবাচক বিশেষ্য পদ
আ) ক্রিয়াবাচক বিশেষণ পদ

14. এককথায় প্রকাশ করো:

1x2=2

যিনি ব্যাকরণ জানেন, যে সব কিছু খায়

15. নিচের বাক্যগুলি সঠিক করে লেখো:

1x2=2

অ) গতকাল আমি স্কুলে যাব।

আ) গোরু আমাদের দুধ দিয়েছিল।

16. বার্ষিক পরীক্ষার প্রস্তুতির কথা জানিয়ে বন্ধুকে একটি পত্র লেখো।

4

SAMPLE

SAMPLE



Brilliant Stars School

(Affiliated to CBSE)

East Dhajanagar, Udaipur, Gomati, Tripura

Term I (Sample Paper)

Session - 2024-25

Subject – Mathematics

Max.Points – 60

Class – IV

Time – 2hrs

Instructions –


- Answer to this question paper must be written in the answer script provided separately.
- First 10 minutes has been allotted for reading the question paper.
- The time mentioned above is the time allotted for writing answers.
- This paper has 6 printed pages.

Student's Name: _____ Date: _____

A. Very short answer questions

1x20=20

1. List all the different 2-D shapes that you see in this object.



2. Round off each number to the nearest thousand.

A. 3,986

3. Choose the correct options to complete the sentences.

200

20

2000

The place value of 2 in 8,029 is _____.

4. Fill in the blanks.

$$900 - 200 = \underline{\quad}$$

5. Choose if True or False.

The number 1,02,300 is greater than the number 1,23,000.

6. Find the missing number. Show your work

$$\underline{\quad} - 2,340 = 5,678$$

7. Choose the correct options fill the gaps

11

7

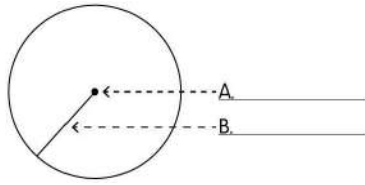
9

3



$$44 = \underline{\quad} \times 4$$

$$63 = 9 \times \underline{\quad}$$

8. Label the parts of the circle.



9. Identify and name the 3-D shapes.



10. Choose ALL the Roman numerals.

A. B

B. Y

C. X

D. I

E. U

11. Which two numbers have an estimated difference of 3,000? Choose ALL the correct options.

B. Short answer questions

2x5=10

21. Complete the table.

Number	Expanded Form	Number Name
80,936		
5,24,702		

22. Choose the correct options to complete the sentences

31 29 28 26

- A. The number form of XXVI is_____.
- B. We can write XXXI in the number form as_____.
- C. XXIX can be written in the number form as_____.
- D. XXVIII represents the number_____.

23. Write 2 differences between a triangular pyramid and a triangular prism.

24. Choose the correct options that describe the error in the problem. Solve it correctly.

	TTH	TH	H	T	O
			+2	+1	
			+6	+2	
			6	7	3
		×		4	9
	6	0	5	7	
2	6	8	2	0	
3	3	9	7	7	

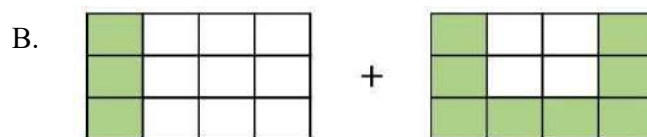
25. Complete the table. *Show your work.*

Radius	Circumference
A. 17 cm	
B.	252 cm

C. Short answer type questions:-

3x6=18

26. Write the fractions for each figure and add them.



27. Write all the multiples of 2 and 3 that are smaller than 24.

28. Draw a circle with a radius of 3 cm. Measure the diameter of the circle drawn

and also the circumference.

29. Create a word problem which shows both addition and subtraction of 4- digit numbers in the same problem and solve it.
30. Find the thousand each number is nearest to. Choose the correct colour for the thousand from the table and write it below each number.

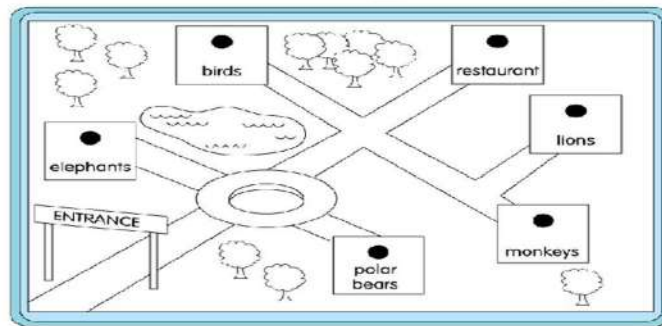
Red: 3,000	Green: 4,000	Blue: 5,000	Yellow: 6,000	Pink: 7,000
3,626	2,994	5,897	5,490	7,008

31. Shilpa walked $\frac{5}{7}$ km on Saturday and $\frac{3}{7}$ km on Sunday. On which day did she walk more, and by how much?

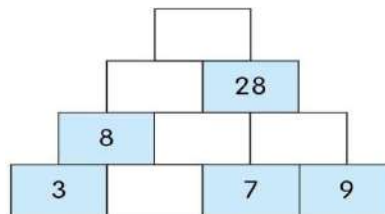
D. Long answer type questions:-

32.

4x3=12
1+1+1+1



- A. If you enter the zoo, what animals will you see to your left and right?
 - B. Which is farther from the lions: monkeys or elephants?
 - C. What route will you follow to reach the restaurant after seeing the birds?
 - D. If you walk straight after seeing the monkeys and turn right immediately, where will you reach?
33. i. Sam is creating an addition pyramid using numbers. Fill in the number in the number pyramid.



- ii. Sarah made this bookmark for her friend. Write whether the bookmark has

a repeating pattern or a rotating pattern.

1



34. i. Solve using the lattice method- 614×22

2

ii. There are 873 students in a school. If each student pays ₹84 for a school picnic, how much money will be collected?

2

SAMPLE



Brilliant Stars School

(Affiliated to CBSE)

East Dhajanagar, Udaipur, Gomati, Tripura

Term – 1(SAMPLE)Session - 2024-25

Subject – Science

Max.Points –60

Class – IV

Time – 2 hours

Instructions –

- Answer to this question paper must be written in the answer script provided separately.
- First 10 minutes have been allotted for reading the question paper.
- The time mentioned above is the time allotted for writing answers.
- This paper has 7 questions and 4 printed pages.

Name of the student: _____

1. Fill in the blanks:-

1x5=5

- There is a total of _____ permanent teeth.
- We get rubber from _____ .
- Plants gives us _____ gas through photosynthesis.
- _____ lives in group to protect themselves.
- The first step of agriculture is _____.

2. Match the columns:-

1x5=5

Column A	Column B
a) 4 year child	i. Permanent teeth
b) Cactus	ii. Temporary teeth
c) 21 year old	iii. Oxygen
d) Total 4	iv. Waxy coating
e) Plants	v. Canines

3. Choose the correct option:-

1x5=5

- Which of the following thing plants do not need for photosynthesis?
 - Water
 - Sunlight
 - Oxygen
- Which of the following thing forest does not give us?
 - Rain
 - Sunlight
 - Oxygen
- Which of these are not aquatic animals?
 - Dolphin
 - Octopus
 - Pigeon
- Which of the following has a storage root?
 - Mango
 - Carrot
 - Sugarcane

- e) The function of Molar teeth is to
 - i. Cut the food
 - ii. Tear the fleshes
 - iii. Chew and grind the food

4. State whether true or false:-

1x5=5

- a) Plants give us metals and plastic.
- b) Spongy stems of floating plants help them to float on water.
- c) Cow or goat are omnivore animals.
- d) Veins are tiny pores found on the underside of a leaf.
- e) Spines protect the cactus from animals.

5. Answer the following questions:


2X5=10

- a) Answer the following questions:
 - i. Write 2 main subgroups into which plants are divided.
 - ii. Why are plants divided into subgroups? Give 2 reasons.
- b) Read the statement and answer the questions using words or short phrases.
Their stems and leaves are spongy and filled with air. Their roots are reduced and not fixed in the soil.
 - i. Identify the type of aquatic plant.
 - ii. Give an example of this type of plant.

- c) Identify evergreen and deciduous plants from the box and then write 1 difference between them

Banyan	Oak	Neem	Rose
--------	-----	------	------

- d) Look at the pictures and answer the questions.



- i. What is the difference in the shape of the teeth of animal A and animal B?
- ii. Write one food that will most likely be eaten by each of the animals, A and B.
- e) How are the given adaptive features of mountain trees and trees in the plains different?
 - i. Shape of tree
 - ii. Type of leaves

6. Answer the following questions:

3X6=18


- a) Read the text and choose if the sentences are True or False.
Reena plucked 2 leaves from different plants. One leaf was small and the other leaf was big. She tested both the leaves with iodine. She observed that the small leaf turned blue-black, while the big leaf did not change colour
 - a. The small leaf contains starch.
 - b. Photosynthesis was taking place in both leaves.
 - c. The big leaf has chlorophyll in it.
 - d. The small leaf can make its own food.

b) Read the information given in the table. Answer the questions in 2 to 3 sentences.

Plant A	Plant B
needle-like leaves	leaves that are reduced to spines
tree trunk has a thick bark	thick and fleshy stem


- What type of plants could Plant A and Plant B be? Give an example of each.
- Explain how the differences in the features given could help them survive in their habitats.

c) Look at the pictures and answer the questions.



- Write 2 ways in which a pine tree and a hibiscus plant are different.
- Write the name of 1 other plant that is similar to the hibiscus plant. Give a reason for your choice.

d) Look at the pictures and answer the questions.



- What is the body covering of a pigeon and a fish?
- Write 1 adaptation of each of them for their movement.
- Write 1 way in which the pigeon and the fish are similar.
- Which of these is a cold-blooded animal? How is it different from a warm-blooded animal?

e) Answer the questions.

- Draw an aquatic animal. Label any 2 features that help the animal to live in water.
- How do these 2 features help the animal live in water?

f) Look at the food chain of a small forest and answer the questions.



- What eats what in the food chain?
- What will happen if there is no butterfly in the forest?
- A food chain also shows the flow of energy. Where do the plants get energy from?

7. Answer the following questions:

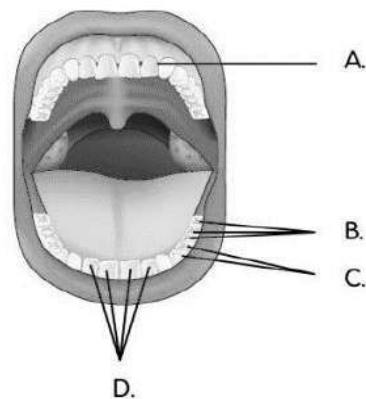
4X3=12

a) Look at the picture of the skeleton of an animal and answer the questions.



- i. Is the animal a vertebrate or an invertebrate? Why?
- ii. Write any 2 features of this animal.
- iii. Write the name of 1 animal that belongs to the same group as this animal.

b) Label the different types of teeth using the words, Canines, Molars, Premolars, and Incisors.



- c) How do these adaptations of a pine tree help it survive in the mountains? Answer in 1 sentence each.
- i. Cone shape and sloped branches
 - ii. Thin, waxy, needle-like leaves
 - iii. Spread-out roots
 - iv. Dark green leaves



Brilliant Stars School

(Affiliated to CBSE)

East Dhajanagar, Udaipur, Gomati, Tripura

Term – 1

Session – 2024-25

Subject – Social Science

Max. Points – 60

Class – IV

Time – 2 hrs


Instructions –

- Answer to this question paper must be written in the answer script provided separately.
- First 10 minutes has been allotted for reading the question paper.
- The time mentioned above is the time allotted for writing answers.
- This paper has 24 questions and 5 printed pages.

Name of the student: _____

PART 1 Short Answer type questions 25 marks

1. Look at the pictures. Choose the picture that shows the regional dress of the Thar Desert.



- A. Picture B
- B. Picture A

2. The Royal Bengal Tiger is our national animal. It stands for _____ 1 3. Which of these symbols should be used to show a bridge on a map? Tick the correct option. 1



- A. Handloom production is declining because wool is too expensive.
 - B. Most of the rivers of the Northern Plains are seasonal.
4. Write whether true or false. 2 A.

5. Choose ALL the options that correctly describe the lifestyle of the people living in the coastal plains of India. 2

- A. People in the coastal plains are nomads and move from one place to another.
- B. Mining and animal rearing are common occupations of the people living in the coastal plains.
- C. People of the coastal plains wear loose, cotton clothes to stay cool.
- D. Farming and fishing are common occupations of the people living in the coastal plains.



6. Choose ALL the tasks that an architect can help us with. **2**
- A.** Planning the design of a house
 - B.** Organizing the electrical wiring of a building
 - C.** Designing a building
 - D.** Adding water pipes in a house

7. Choose ALL the options that correctly describe the Thar Desert. **2**
- A.** In the summer season of the Thar desert, the days are cool and the nights are warm.
 - B.** In the summers, dry winds blow through the Thar Desert.
 - C.** Winters are very cold in the Thar Desert and it snows a lot during this period.
 - D.** The Thar Desert receives very little rainfall.

8. Write the elements that can help in each situation. **2**

Situation	Which element of a map can help? (title/scale/compass/legend)
Neera wants to understand what the red dots on a map mean.	
Jack wants to find out the distance between 2 villages.	

9. Look at the pictures and answer the questions. **2**

	
Picture A	Picture B

- a. Write what each person's job is.
- b. Is one person's job more useful than the other's? Give 1 reason for your answer.

10. Read the text and answer the given questions:

Sara stays with her parents and grandparents. Sara has a 4-month-old baby sister. **2**

- A. Write 1 way in which Sara's grandmother can take care of the baby.

B. Write 1 way in which Sara's father can take care of the baby.

11. What would be your duty as a good citizen in each of these situations? 2

Situations	Duty
You are travelling by car and the traffic light turns red	
You see wrappers lying on the road	

12. How can you help these people? Write 1 way each. 2

Neighbour	How can you help?
A. A neighbour who cannot hear and speak	
B. An old neighbour who lives alone	

13. Karim is 8 years old and lives on the street. Which rights of a child is he NOT likely to have? 114.

Write about the 2 family values that is practiced at your home. 115. Write 2 problems that a weaver could face. 2

Part 2 Long answer type questions 35 marks

16. Look at the picture. Answer the questions in 1–2 sentences. 3



- A. Which crop is shown in the picture?
- B. What type of soil is good for growing this crop?
- C. In which part of the plateau region is this crop commonly grown?

17. **Read the text and answer the given questions: 3** Ahil lives in a village in Jammu and Kashmir. He has many goats and sheep. He can see the Northern Mountains from his window.

- A. What is Ahil’s occupation?
- B. What food would Ahil and his family eat? Give 2 examples.

18. Madhu is moving from a place in the Northern Plains to a place in the Northern Mountains. Can she wear the same kinds of clothes she wore during summer in the Northern Plains when it is winter in the Northern Mountains? Give reasons for your answer in 2 to 3 sentences. **3**

19. Write 1 similarity and 2 differences between the Western and Eastern Coastal Plains. **3**

Western Coastal Plains (Differences)	Similarity	Eastern Coastal Plains (Differences)

20. Look at the picture showing the backwaters of Kerala and answer the questions. **3**



- a) You can see a lot of coconut trees growing along the backwaters. How does the presence of coconut trees influence the livelihood of people living there?
- b) How can people staying along the backwaters use the river to earn a living? Write any 2 ways.
- c) If someone from the coastal plains went to the Thar Desert region, what occupation would that person be unable to do and why?

21. Fill in the table to compare the Chota Nagpur region and the Deccan Plateau region. **6**

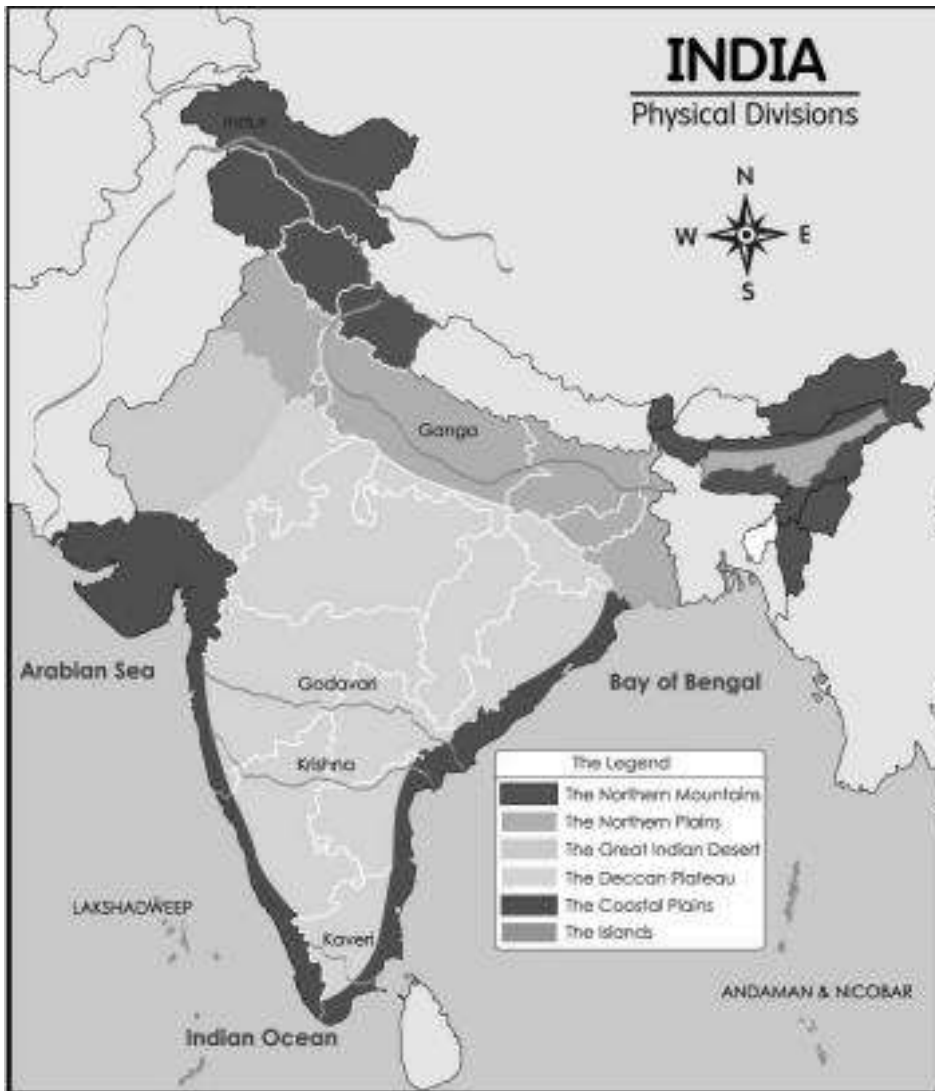
	Chota Nagpur Region	Deccan Plateau Region
Location		
Climate		
Minerals		

22. Mamta is very excited to go to Sameer Uncle's wedding. She will meet her cousins and relatives there. Write 4 things that happen at a wedding. 4

23. How many types of maps are there? Why do we need different types of maps? 3+2

Page 4 of 5

24. Look at the map and answer the questions. 5



- Which element of the map is missing? What does it help us with?
- Which waterbody lies to the south of India?
- Which physical division lies in the northernmost part of India?
- Which physical division does most of the Godavari River lie in?
- Which country shares the longest land border with India?

SAMPLE



Brilliant Stars School

(Affiliated to CBSE)

East Dhajanagar, Udaipur, Gomati, Tripura

Term-1

Session- 2024-25

Subject- Computer

Max. Points – 30

Class – IV

Time: 1 hour

- Answer to this question paper must be written in the answer script provided separately.
- First 10 minutes has been allotted for reading the question paper.
- The time mentioned above is the time allotted for writing answers.
- This paper has 7 questions and 2 printed pages.

Name of the Student: _____

1. Write True / False:

1 x 2 = 2

- a. A folder is also called a directory.
- b. Speakers are available in different shapes, sizes and colours.

2. Fill in the blanks:

1 x 2 = 2

- a. A program used to access websites on your computer is called _____.
- b. A _____ is a multimedia element with moving graphics and sound effects or dialogues playing in the background.

3. Arrange the steps to create a numbered list in the correct order:

3

Lisa is creating a document on the topic “Types of pollution”. She needs to write about four types of pollution. Help her perform the task.

A.	Press the enter key after typing each item or sentence in the list.	
B.	Create the area where you want to start typing text.	
C.	A numbered list appears.	
D.	On the Home tab, from the paragraph group, click the Numbering icon.	
E.	It shows the different number formats.	
F.	Clicking the arrow next to the Numbering displays the Numbering library	

4. Find out the errors:

1x2 = 2

- a. The search engine displays results which are not hyperlinks of websites that containing information related to your search.
- b. Spelling checking is always on the review tab.

5. Answer in One Word:

1x2 = 2

- a. Key to open a file or folder after selecting it.
- b. The menu that appears after right clicking any object.

6. Short answer type questions:

2x5 = 10

- a. What do you understand by animation?
- b. What is the first step to start Windows Media Player?
- c. What is a footer in MS Word?
- d. What feature of MS Word will you use to check spelling and grammatical mistakes in a Word document?
- e. How do you use the Internet for entertainment?

7. Long Answer type Questions:

3 x 3 = 9

- a. Mansi wants to record a poem in her voice on a computer. Which device should she use and why?
- b. How can we use the Google search engine to search for information?
- c. Manish is confused between two multimedia elements- video and audio. Help him differentiate between the two.



Brilliant Stars School

(Affiliated to CBSE)

East Dhajanagar, Udaipur, Gomati, Tripura

Term- I

Subject – English

Class – IV

Session-2024-25

Max. Points –60

Time – 2 hrs

Instructions –

- Answer to this question paper must be written in the answer script provided separately.
- First 10 minutes have been allotted for reading the question paper.
- The time mentioned above is the time allotted for writing answers.
- This paper has **17** questions and **4** printed pages.

Part 1: Very Short Answer Type Questions

1. Fill in the blanks with a suitable adjective. (bigger, all, happiness, brilliant) (1/2x4=2)

- Ram gave _____ the papers to his mother.
- My all the students are _____ in the studies.
- Do you think money can buy _____?
- That table is _____ than the brown one.

2. Write a sentence with each word, based on the part of speech given in brackets: (1x4=4)

- Match (verb)
- Match (noun)
- drop (verb)
- drop (noun)

3. Fill in the blanks, using the correct comparing adverbs given in brackets. (1/2x4=2)

- Jimmy ran the _____ of all. (fast/faster/fastest)
- My mother and my sister talked _____ than the other guests. (loudly/more loudly/most loudly)
- Our new teacher explained the exercises pretty _____. (badly/worse/worst)
- That's the _____ she has ever driven. (slowly/more slowly/most slowly)

4. Complete the dialogue by filling in the blanks with suitable demonstrative, interrogative, or reflexive pronouns: (1/2x4=2)

Bina: _____ board game is this?

Tina: _____ is my dad's.

Bina: _____ is this board called?

Tina: It is a chess board. See, _____ are the chess pieces.

5. What is the poet describing in the poem, Silver? Choose the correct option. (1)

- The way things look at night
- The beauty of the moon

- c. The trees and the mouse
- d. The reason why the moon shines

6. Write how you would feel in these situations.

(2)

- a. You are going to your friend's birthday party
- b. Your pet is sick

7. Make 2 sentences, using words starting with the sounds d and k. One has been done for you. (1x2=2)



Bob saw a big brown bear near the Barley Bridge.

8. Rearrange the words in the correct order to form statements or questions:

(1x3=3)

- a. Will buy/for a farewell/reena/a new dress
- b. Give/truthfully/question/an answer/to this
- c. In the/mangoes/ there/are/kitchen

9. Write a sentence for each picture, giving a human characteristic to the thing in it. You can use the words from the box in your sentences. (1x2=2)

Smile	Happy	Whistling	bowling
			

10. Read the sentences. Rearrange them in the order in which they took place in the story. (1x4=4)

- a. Mr. McGregor ran after Peter calling out, "Stop, thief!"
- b. He slipped underneath the gate and was safe at last in the woods outside the garden.
- c. Peter was dreadfully scared and rushed into the tool shed.
- d. Peter promised himself that he would never be naughty again.

11. Read the opinion paragraph. Write an ending for it.

(2) I think mint

chocolate chip is the best ice cream. To begin with, it has chocolate chips in it. I really like chocolate chips as they slowly melt in your mouth, making your mouth all chocolatey for a long time. Next, it is very crunchy and provides the right crunch needed with the soft cream. Lastly, the mint adds a much-needed twist to it. This is because it leaves your mouth fresh after the sweetness of chocolate.

Part 2: Long Answer Type Questions

12. Guess the meaning of the underlined words. Match the words with their correct meanings: (1x3=3)

Column A	Column B
a. Thunder <u>boomed</u> over the hills and the lightning came quicker now.	i. Gathered together closely
b. The children <u>huddled</u> together in the corner with excitement and relief	ii. To identify someone or something that you have seen or heard before
c. Usha heard a boy's shout and she instantly <u>recognised</u> the voice.	iii. Made a loud, deep sound

13. Look at the picture and write 4 SENTENCES to talk about the WEATHER:

(4)



14. Answer the following questions in 2 or 3 sentences:

(2x6=10)

- Describe how you would feel if you met your cousin after a long time.
- Why did Peter go into Mr. McGregor's garden?
- Do you think that Usaha made a sensible decision to take shelter in the ruins? Why? Why not?
- Read the given stanza of the poem and write the summary of it.

<p>But on quiet days in May or June, When even the grasses on the dune Play no more their reedy tune, With his head between his paws He lies on the sandy shores,</p>

So quiet, so quiet, he scarcely snores.

e. Do you prefer sunny weather to rainy weather? Give a reason for your answer. Explain in 2-3 sentences.

15. Read parts of the story, The Wind on Haunted Hill Part 1. Answer the questions. (3)

They were talking and drinking cups of hot, sweet tea when Usha realised that dark clouds had gathered over the mountains. She quickly picked up her things, said goodbye to her aunt, and set out for the village. The raindrops were coming down faster now – cold, stinging pellets of rain. A flash of lightning sharply outlined the ruins on the hill, and then all was dark again. Night had fallen. "I'll have to shelter in the ruins," Usha thought and began to run. There was another flash of lightning, followed by a peal of thunder. The ruins loomed before her, grim and forbidding.

- a. What challenge does Usha face in the story? (1)
- b. What does Usha do to solve the problem she is facing? (2)

16. Write a short opinion paragraph on any one topic from the given one. Use any two prepositional phrases in your paragraph. (4)

1. Should animals be caged?
2. Mobiles should be allowed in the school
3. Children should watch more television

17. Write a letter to your cousin and invite him/her for this coming Durga Puja. (5)

18. Compose a poem on any one of the following topics and also give a suitable title to it. (5)

1. The moon
2. My mother
3. The Trees