



Brilliant Stars School

(Affiliated to CBSE)

East Dhajanagar, Udaipur, Gomati, Tripura

Term – 1

Session - 2023-24

Subject – Mathematics

Max.Points – 60

Class – V

Time – 2hrs

Instructions –

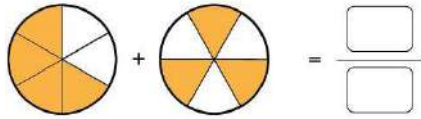
- Answer to this question paper must be written in the answer script provided separately.
- First 10 minutes has been allotted for reading the question paper.
- The time mentioned above is the time allotted for writing answers.
- This paper consists of 3 printed pages.

Student's Name: - _____

1. Fill in blanks:-

1x5 = 5

- a) $\frac{5}{7}$ of 14 balls = _____ balls.
- b) The sixth multiple of 5 is equal to the _____ multiple of 10
- c) Ray bought a new house for \$224,650. The amount in words is _____.
- d) CCLII in Hindu Arabic number is _____
- e)



2. Match the columns:-

1x5 = 5

Column A	Column B
i) The simplest form of $\frac{18}{21}$	a) 5,379
ii) $\frac{12}{13} \times 7$	b) $\frac{8}{18}$
iii) Equivalent fraction of $\frac{4}{9}$	c) 1,112
iv) $5560 \div 20$	d) $\frac{6}{7}$
v) 489×11	e) $\frac{84}{13}$
	f) $\frac{84}{91}$

3. Choose the correct option:-

1x5 = 5

- a) $7 \times \frac{2}{3} =$ _____
 - i) $\frac{2}{21}$
 - ii) $\frac{14}{21}$
 - iii) $\frac{14}{3}$
- b) Stella is solving a crossword puzzle. She needs to enter one of these numbers that has both 5 and as common factor. Choose the number that she will enter.
 - i. 2,875
 - ii. 4,304
 - iii. 5,980

- c) Estimated difference of 8780 & 2390 is
- 6000
 - 5000
 - 11000
- d) The representation of 7605248 in Indian number system is:-
- 7,605,248
 - 76,05,248
 - 7,60,52,48
- e) $957 \div 21$
- Q=39, R=21
 - Q=38, R= 21
 - Q=39, R=20

4. State whether true or false:-

1x5 = 5

- $\frac{19}{21} - \frac{18}{21} = \frac{1}{21}$
- Rounding off 7,112 to the nearest 1,000 will give 7,000
- The value of the Roman numeral D is 500
- If the numerator is greater than the denominator then it is called proper fraction.
- 15 is a prime number.

5. Answer the following questions (any 5) :-

2x5 = 10

- Write the expanded form and number name of 24,455,245
- In a fruit basket, $\frac{3}{5}$ of the total fruit is apples and the rest are oranges. What fraction of fruits are oranges?
- Arrange them in descending order: - 70510,70505,101010,101001
- Read about the population of a city each year over 4 years. Then answer the following questions. (1+1)

CITY	POPULATION
2009	73,49,402
2012	One crore seventy eight thousand sixty
2015	eight million nine hundred thirty four thousand two hundred eighty
2018	9,005,193

- In which year did the city have lowest population?
- In which year did the city have the highest population?
- Mark the approximate position of 74,560 in the given number hill and then round off it.



- In a game competitors must throw darts only at boards that have numbers divisible by 2 and 4. Which of these boards will they throw the darts at? Show your work.
1,726 ; 2,920 ; 3,024

6. Answer the following questions (any 6) :-

3x6 = 18

- a) Find the HCF of 44, 80 and 256 by using common division method.
- b) Arrange the fractions in ascending order:- $\frac{7}{12}, \frac{1}{8}, \frac{2}{15}$
- c) There are 11,265 trees in city A and 57,656 trees in city B. (1+2)
- a. How many trees are there in both; the cities together? Show your work.
- b. If out of those trees 1550 are destroyed due to land slide and 152 are cut for construction purpose then total how many trees are left in both the cities together?
- d) Find all the factors of 48 and then categorise them in prime and composite factors.
- e) Convert the following as instructed:- (2+1)
- a. $\frac{7}{9}$ & $\frac{2}{5}$ convert into like fractions
- b. $5\frac{2}{3}$ convert into improper fraction.
- f) Find the Difference:- $\frac{5}{7} - \frac{2}{18} - \frac{1}{21}$
- g) Anna and Rhea donated some amount of toys. They have same number of toys. Anna donated $\frac{17}{36}$ of her toys and Rhea donated $\frac{13}{24}$ of her toys.
Who donated more toys and by how much?

7. Answer the following questions (any 3) :-

4x3 = 12

- a) Create a word problem for $8,756 - 3,638$ and then solve it.
- b) Draw factor trees for 96 and 144 and find their LCM.
- c) 456 fruits need to be divided among 9 children. Can you divide those equally among 9 children without any fruit being left over? If not, then how many fruits will be left over after dividing those equally among 9 children?
- d) The bus fare from Agartala to Guwahati for 1 person is ₹525. (2+2)
- a. Find the total bus fare for Payam and 13 of his friends.
- b. To increase its sales, the bus company is offering 18 tickets for ₹8,550. What is the bus fare for 1 person?



ব্রিলিয়ান্ট স্টারস স্কুল

(সি.বি.এস.ই. দ্বারা অনুমোদিত)
পূর্ব ধ্বজনগর, উদয়পুর, গোমতী, ত্রিপুরা।
ষাণ্মাসিক মূল্যায়ন বর্ষভাগ-২০২৪-২০২৫
বিষয়- বাংলা শ্রেণী- পঞ্চম
সময়- ২ ঘণ্টা পূর্ণমান- ৬০

- এই প্রশ্নপত্রের উত্তরগুলি আলাদাভাবে প্রদত্ত উত্তরপত্রের মধ্যে লিখতে হবে।
- প্রশ্নপত্রটি পড়ার জন্য প্রথম দশ মিনিট ধার্য করা আছে।
- প্রশ্নপত্রের উপরে লিখিত নির্ধারিত সময়ের মধ্যেই উত্তরগুলি লিখতে হবে।
- এই প্রশ্নপত্রে মোট ২টি পৃষ্ঠা বিদ্যমান।

ছাত্র/ছাত্রীর নামঃ

১। একটি সম্পূর্ণ বাক্যে উত্তর লিখঃ

৫

- ক) লেখকের বাবা কিসের আলোয় রাতে লিখতেন ?
- খ) তুরপ্ নের ফলা দিয়ে কি কাজ করা হত ?
- গ) কোথায় কালী পূজা ছিল ?
- ঘ) কেল্লার মতো কে এঁকে বেঁকে চলছিল ?
- ঙ) হাউই কি ?

২। দু- তিনটি বাক্যে উত্তর লিখঃ

৮

- ক) দার্জিলিং এর উপর উঠে লেখকের অনুভূতি কেমন ছিল ?
- খ) ভেবে পাইনে নিজে — কবি কি ভেবে পান না ?
- গ) সাহেবরা সুনল না — কার কোন কথা সাহেবরা সুনল না?
- ঘ) দশ দিকেতে পড়বে টুটে — কী টুটে পড়বে?

৩। পাঁচ / ছয় টি বাক্যে উত্তর দাওঃ

৯

- ক) আমার মা গল্প থেকে ৫/ ৬ টি -গুরুত্ব পূর্ণ ঘটনা লিখ ?
- খ) ফাল্গুন - কবিতার মূলভাব লিখ ?
- গ) লালু গল্পে তোমার কাকে ভালো লেগেছে - কয়েকটি বাক্যে লিখ ?

৪। রেখাঙ্কিত পদ / মোটা হরপে পদ গুলির কারক নির্ণয় কর

৫

- ক) আগ্রায় তাজ মহল আছে।
- খ) ঘোড়ায় গাড়ি টানে।
- গ) গরিবকে দুটো টাকা দিন বাবু।
- ঘ) গাছ থেকে আম পড়ল।
- ঙ) মেয়েটি কলম দিয়ে লিখে।

৫। নিচের বাক্য গুলির উদ্দেশ্য ও বিধেয় অংশে ভাগ করো:

৫

- ক) দশরথ অযোধ্যার রাজা ছিলেন
- খ) তিনি আমাদের বাংলা পড়ান।
- গ) জৈষ্ঠ মাসে আম পাকে।
- ঘ) পাখি সব করে রব।
- ঙ) ছেলেরা মাঠে খেলছে।

৬। লিঙ্গ পরিবর্তন কর পুত্র, মাতামহ, ময়রা, লেখিকা, বর

৫

৭। সংজ্ঞা লিখ - ভবিষ্যৎকাল, উদ্দেশ্য, ক্লীব লিঙ্গ, স্বর সন্ধি, নিমিত্ত কারক

৫

৮ ক্রিয়ার কাল নির্ণয় কর

৫

- ক) চিরদিন তিনি অমর হয়ে থাকবেন।
- খ) সকাল সকাল বাড়ি ফিরব।
- গ) নেতাজি মহান নেতা ছিলেন
- ঘ) ওরা কাজটি করবে।
- ঙ) উত্তরণ গতকাল এসেছিল।

৯। ১০/১২ টি বাক্যে, নিচের যে কোন একটি শিরোনাম দিয়ে একটি অনুচ্ছেদ রচনা কর:

৮

রক্তদান অথবা আমি স্বয়ং।

১০। বোধ পরীক্ষণ: অনুচ্ছেদ টি পড়ে নিচের প্রশ্ন গুলির উত্তর দাও ?

৫

সমুদ্র তীরের কাছেই একটি গ্রামে হান্স নামে এক ওলন্দাজ কিশোর তার বাবা-মার সাথে বাস করত। হান্সদের গ্রামটা নিতান্তই ছোট ছিল এ গ্রামে একটিও স্কুল ছিল না। তাই হান্স রোজ দু-মাইল হেঁটে পাশের গ্রামের একটা স্কুলে পড়তে যেত। ঠাণ্ডা কনকনে শীতের মাসগুলোতে হল্যান্ড দেশে খুব তাড়া তাড়ি সূর্য অস্ত যায়। তাই হান্স তখন হেঁটে হেঁটে স্কুল থেকে বাড়ি ফিরত, তখন চার দিক অন্ধকার হয়ে যেত।

- ক) হান্স কে ?
- খ) সে কোথায় কাদের সাথে বাস করত ?
- গ) হান্স কোথায় পড়তে যেত ?
- ঘ) হল্যান্ড দেশে কখন খুব তাড়া তাড়ি সূর্য অস্ত যেত?
- ঙ) হান্স কি ভাবে বাড়ি ফিরত ?

SAMPLE



Brilliant Stars School

(Affiliated to CBSE)

East Dhajanagar, Udaipur, Gomati, Tripura

Term – I (Sample Paper)

Session - 2024-25

Subject – English

Max. Points – 60

Class – V

Time – 2 hrs

Instructions –

- Answer to this question paper must be written in the answer script provided separately.
- First 10 minutes has been allotted for reading the question paper.
- The time mentioned above is the time allotted for writing answers.
- This paper has 17 questions and 3 printed pages.

Name of the student: _____

PART I - Short Answer Questions

30 Marks

1. Choose the correct options:

1+1

A. Choose which is not an important part of story review

- i. Name of main characters
- ii. Important events
- iii. details of the story.

B. Choose the false information about the story, “Petrkins Tries to Become Wise”

- i. Mrs Peterkin had many books to make the whole family wise.
- ii. The Lady of Philadelphia was a good friend of the Peterkin family
- iii. The postmaster refused to give them any paper.

2. Identify the sound that is repeated in the lines. In which words is the sound repeated:

1+1

A. And the day is loud with voices shrieking

3. Read this story review.

2+1+1

What do you like about the review? Why? What could be better about it?

“Journey to Juno belongs to the Galaxy Zack series. This is the second book of the series. It is one of my favourite stories, and it is as good as the first one. Zack is the main character of the story. He joins an academy for explorers at his school and goes on a trip to Juno. Juno is a new planet that nobody has been to. Zack clubs up with Seth, who was also his classmate, but a bully. However, Zack was very excited when he came across a huge galaxy, Gemmite.

4. Choose ALL the sentences where indefinite pronouns are used correctly:

2

- A. Please give me something to eat
- B. Solomon John does not know what to write in his book
- C. Nowhere it is mentioned the guidelines of the trip.
- D. I am very hungry, but it is very meagre meal that you served me.
- E. When they entered the classroom, they saw that the fans are moving.
- F. The lady from Philadelphia goes away.

12. Read the part of the story:

5

One day, a rich man, getting annoyed to his son's too many demands, decided to take his son on a trip to the countryside. The wealthy man wanted to show his son how poor people live, so he could be thankful for his wealth.

They spent two days in a farmhouse of a very poor family. On their way to home, the rich man asked his son, "How was our trip with this poor family and what did you learn?"

Finally, the son added, "Thanks Dad for showing me how poor we are!"

Write what the son may reply in 5 to 6 sentences in your own words. Start your sentence with this phrase:
In this paragraph, we can see the son was ...

13. Read the lines from the poem. Add four more lines using assonance:

4

Bells*Hear the mellow**Wedding bells,**Golden bells!**What a world of**Happiness their harmony**Foretells!***14. Imagine you are Sameer.**

- A. What would you do or say, and why, when Nada told you that you had no right to the olives?
B. Think of a situation in which you felt somebody was doing something that they had no right to.
What would you say or do and why?

2+2

15. Read the lines from the poem.

2+2

*The maple wears a gayer scarf,**The field a scarlet gown.**Lest I should be old-fashioned,**I'll put a trinket on.*

- A. Which mood does the maple have here? Which word tells you this?
B. Why do you think the poet wishes to call herself an 'old-fashioned'?

16. What did you like about the poem, "Travel"? Why? Write in 40–50 words.

2+2

17. Read the following stanza of the poem and fill up the following table:

2+2

All night there isn't a train goes by,
Though the night is still for sleep and dreaming,
But I see its cinders red on the sky,
And hear its engine steaming.

Identify the tone and the mood expressed in the quoted stanza. What tells you this?

SAMPLE



Brilliant Stars School

(Affiliated to CBSE)

East Dhajanagar, Udaipur, Gomati, Tripura

Term-1 (Sample paper)

Session - 2024-25

Subject – Science

Max.Points – 60

Class – V

Time – 2hrs

Instructions –

- Answer to this question paper must be written in the answer script provided separately.
- First 10 minutes has been allotted for reading the question paper.
- The time mentioned above is the time allotted for writing answers.
- This paper 4 printed pages.

Name of the Student:- _____

A. Very short answer type question:

(a) Choose the correct option from the followings:

1x5=5

1. Condition which do not required for seed germination is
 - (i) Moisture
 - (ii) Presence of oxygen
 - (iii) Fertilizers
 - (iv) Suitable temperature
2. Example of carbohydrate is
 - (i) Nuts
 - (ii) Maize
 - (iii) Pulses
 - (iv) Fish
3. Which one is communicable diseases?
 - (i) Hypertension
 - (ii) Scurvy
 - (iii) Swine flu
 - (iv) Thalassemia
4. Breathing organ for grasshoppers is
 - (i) Spiracles
 - (ii) Skin
 - (iii) Nostrils
 - (iv) Gills
5. Dandelion seeds are dispersed by
 - (i) Animal
 - (ii) Water
 - (iii) Wind
 - (iv) None of the above

(b) Fill in the blanks:

1x5=5

6. Anaemia occurs due to the lacking of _____. (Vitamin E/ Iron)
7. Squirrels eat nuts and seeds of plants, so they are _____. (Omnivores/ Herbivores)
8. Turning and loosening the soil during crop cultivation is _____. (Irrigation/ Ploughing).
9. A defective air conditioner can produce a _____ (Soothing/ Unpleasant) sound.
10. Akash put the cookies insides his _____ (Translucent/ Opaque) bag so that his sister would not find them.

(c) Write True/ False:

1x5=5

11. Pollen grains land on the ovary of the pistil.
12. Hereditary diseases are communicable diseases.
13. The unpleasant sound of loudspeaker may increase the heartbeat.
14. Non-flowering plants are reproduce with the help of spores.
15. Sweet potato undergoes vegetative propagation with the help of leaves.

(d) Very short answer type questions:

1x5=5

16. Write one example of pollinators.
17. Write the importance of manuring during crop cultivation.
18. Kylie brought home a plant and potted it in her garden. In a few weeks, the space near the plant was full of numerous little plants that looked exactly like the plant that Kylie had got. Which plant could Kylie have got- Bryophyllum or Hibiscus?
19. How do squirrels help with seed dispersal?
20. During shadow formation, write down the position of the object.

B. Short answer type questions(Answer any five questions) :

2x5=10

21. Write any two differences between organic and inorganic fertilizers?
22. Polly sprained her muscles while playing basketball. Which type of nutrient she should include more in her diet to recover fast and why?
23. How do loud sound affect our ears? Write any two points.
24. Which material would you choose to make kitchen containers for different spices so that you can easily see what is inside them? Why? (1+1)
25. Even though both whale and fish lives in same habitat but their breathing organs are different-why?
26. Read the table and answer the following questions –

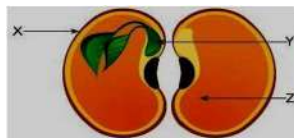
Crop	Month in which it is sown	Month in which it is harvested	Growing season
Cotton	May	November	Summer
Mustard	October	March	Winter
Pea	November	April	Winter
Groundnut	June	October	Summer

- i. Why are different crops grown in different seasons? 1
- ii. Predict what may happen if pea crops are sown in the summer season. 1

C. Long answer type questions (Answer any six questions):

3x6=18

27. Look at the picture and answer the questions.



Identify X, Y and Z.


28. Match each seed with the most probable way in which it is dispersed by animals.

Options	Way of seed dispersion
Mango	By burial for later use
Burdock	By disposal after consumption
Acorn	By attaching itself to the fur

29. Suzy eats a handful of nuts, while her brother eats a packet of chips for evening snacks.

- Which snack can be classified as junk food – nuts or chips? Why? 1.5
 - Predict how eating junk food, like the one you chose above, can affect one's health. 1.5
30. Answer the questions in 1–2 sentences. (1.5+1.5)

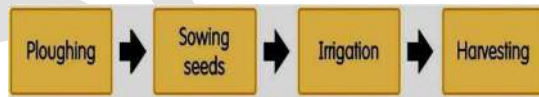
- Which part of the flower is sticky? Give a reason for your answer.
 - What will happen if the style of the flower is absent?
31. Look at the pictures of deficiency diseases and answer the questions. (2+1)



- Write down the name of disease 1 and disease 2.
 - Write down the cause of disease 1 and disease 2.
32. Write down 3 differences between umbra and penumbra.
33. What do you mean by acquired diseases and hereditary diseases? Write with example. (1.5+1.5)

D. Answer the following questions (Answer any three questions): **4x3=12**

34. A farmer followed these 4 steps when growing wheat in his field.



- Which steps of cultivation did the farmer not do? 1
 - Why are the steps that the farmer did not do important? 2
 - How will not doing these steps affect the crop yield? 1
35. Explain the reason of lunar eclipse with diagram. (2+2)
36. A branch of the jasmine plant growing along the ground is covered with a layer of soil.
- What changes will be seen in the part covered with soil. 2
 - What does this show about the method of propagation in jasmine plants? 1
 - How do grafting differ from the cutting method of asexual propagation? 1

37. The table shows the meals consumed by 2 different girls of the same age.

Meal	Girl 1	Girl 2
Breakfast	Milk	Eggs, bread, milk, and apple
Lunch	Rice, papad, and yoghurt	Vegetables, pulses, chapati, yoghurt, and salad
Dinner	Rice and milk	Rice, butter chicken, and salad

- a. Which girl consumes a balanced diet – Girl 1 or Girl 2? 1
- b. What changes should the other girl bring to her diet? 1
- c. If the girls do not drink enough water during the day, what might happen? Predict any two effects. 2



Brilliant Stars School

(Affiliated to CBSE)

East Dhajanagar, Udaipur, Gomati, Tripura

Sample Paper

Subject – Computer

Max.Points – 30

Class – V

Time – 1 hour

Instructions –

- Answer to this question paper must be written in the answer script provided separately.
- First 10 minutes has been allotted for reading the question paper.
- The time mentioned above is the time allotted for writing answers.
- This paper has 4 questions and 1 printed pages.

Name of the Student: _____

1. Very Short Answer type questions:

1 x 6 = 6

I. Fill in the blanks:

- The first mechanical calculating device was _____.
- A memory that loses its content when the device is turned off is called _____.

II. Write whether the statement is true/false:

- Secondary memory can be directly accessed by the CPU. (True/False)
- We can recover deleted files from the recycle bin. (True/False)

III. Correct the given statements:

- Data stored in pen drive cannot be erased.
- Time and date cannot be set manually.

2. Short Answer type questions:

2 x 4 = 8 a.

- What is the illustrating group used for?
- What is the use of split feature?
 - How can you delete files permanently from the recycle bin?
 - Which memory is considered to be non-volatile? Why is it called so?

3. Long Answer type questions:

4 x 2 = 8 a. Write

- a short note on device Abacus.
- Write down the steps to change the desktop background of the Windows 7 desktop.
 - Write an example of 5th generation computer. Mention its three features.
 - Mention the different ways to open a table in MS Word. After making it, can you add more rows and columns there?

4. Case based questions:

4 x 2 = 8

- Sam needs to create a table in MS Word with the following features:

- a. 3 rows and 5 columns
- b. Shade row number 3 with green colour
- c. Apply border style in column 1 Please help Sam in this task?

2. Amruta has accidentally deleted 20 files from her PC. Help her to find the files and to restore them.

SAMPLE



Brilliant Stars School

(Affiliated to CBSE)

East Dhajanagar, Udaipur, Gomati, Tripura

Sample Paper

Subject – Social Science

Max.Points – 60

Class-V

Time – 2hrs

General instructions: –

- Answer to this question paper must be written in the answer script provided separately.
- First 10 minutes has been allotted for reading the question paper.
- The time mentioned above is the time allotted for writing answers.
- This paper has 8 questions and 4 printed pages.

Name of the Student:

1. Choose if True or False.

4 x 1 = 4

- A television shows videos that have both sound and video.
- Cave paintings showed humans and animals.
- We should throw wet and dry garbage in the same dustbin
- Homo sapiens had smaller teeth than the human species before them.

2. Fill in the blanks using the correct words from the box.

1 x 4 = 4

Neighbours	Together	Joint	friendly	Separately
------------	----------	-------	----------	------------

Many years ago, when our grandparents were children, most of the families were _____ families. During those days, even the _____ were like family. They shared a _____ relationship. Families in a village often celebrated festival _____.

3. Choose the correct option

4 x 1 = 4

- A. Choose 2 main features of the Age of Exploration.
- Europe and Africa fought many wars for land.
 - European explorers discovered new trading routes.
 - Countries across the world traded goods and services.
 - People travelled and traded within their own cities and towns.
- B. Which of these is about the dignity of labour? Choose the correct option.
- Child labour must be banned.
 - Treat the cleaners with respect.
 - Keep the neighbourhood clean.
 - Throw garbage in bins.
- C. In which of these regions of India are people living there most likely to be affected by floods? a. Thar Desert

- b. Eastern Coastal Plains
- c. Himalayan Region
- d. Plateau Region

- D. if you want to know about a country, which of these will you use on the Internet!
- a. Satellite
 - b. Email
 - c. Search Engines
 - d. Key pad mobile which does not have an internet connection.

4. Complete the Table:

4 x 1 = 4

	Early Humans	Present- Day People
What tools did they use?		
What type of wheels did they use?		

5. Match the following:

4 x 1 = 4

1. Igloo	a. Arctic region
2. Yurt	b. Thar Desert
3. Stilt House	c. Brazil
4. Tent	d. Grasslands of Central Asia

6. Answer the following questions

8 x 2 = 16

- a. Cave paintings made by early humans usually had these drawings.



- i. What do you think this drawing shows?
- ii. Why did early humans draw this in many of their paintings?

b. Look at what the early humans are doing. Who do you think used fire first? Choose the correct picture.



- c. Write 2 things that we can learn about early humans from this cave painting.
- d. Why do you think we should respect all jobs? Explain with the help of an example in 3 to 4 sentences.
- e. Why are most villagers not happy in the city and want to go back to their villages? Write 2 reasons.
- f. Imagine you are invited to have a meal with a group of hunter-gatherers. What do you think they will give you to eat? Give two reasons for your answer.
- g. Hema has to migrate from a city to a village for work. Write 2 problems that she might face in the village.
- h. Write any 2 disadvantages of living alone.

7. Case based questions

3 x 4 = 12

a. Read the passage and answer the questions.

It took Shah Jahan, the Mughal emperor, almost 22 years to build the Taj Mahal. About 20,000 people worked to build this beautiful monument. The land on which the Taj Mahal is built belonged to a Rajput king. The Taj Mahal is built of white marble brought from Rajasthan. The walls were decorated with 28 different kinds of precious stones which came from Punjab, China, Tibet, and Sri Lanka. The Taj Mahal is located in a garden divided into 4 parts in the Persian Charbagh style. The inner boundary has umbrella-shaped domes called chattris. These chattris are found in many Hindu temples too. The roof of the Taj Mahal is in the shape of a dome which is common in mosques.

- i. What do the building materials tell us about the past? Answer in 2 to 3 sentences.
- ii. What does the Taj Mahal tell us about the workers who worked on it? Answer in 1 to 2 sentences.
- iii. What does the Taj Mahal tell us about the emperor who built it? Answer in 2 to 3 sentences.

b. Raj migrated to another place after his house was destroyed in an earthquake. He was left without a job and a home. Aslam migrated from his village to a nearby town because he wanted his children to study in a better school.

Write 2 differences between Raj and Aslam's migration.

Raj's migration	Aslam's migration

c. Read Maya's diary and answer the questions.

Saturday, January 2015	Saturday, January 2021
We are going on a picnic today! My mother and aunt made some snacks for the picnic. We packed some games to play. My brother, my cousins, and I got into one car with grandma and grandpa while my parents, uncle, and aunt got into another. We reached the picnic spot singing along the way. We had a great time eating and playing together.	It's a holiday today. My father made breakfast for us. My mother watered the plants. My brother and I cleaned the cupboards. In the afternoon, we all went to a car showroom where my parents bought a nice car. In the evening, my parents went to buy fruits and vegetables while my brother and I stayed at home.

- i. Write 1 way in which the responsibilities of the family members changed over the years in Maya's family.
- ii. Who do you think takes decisions in Maya's family now?
- iii. If this were your family, which of the two Saturdays would you have enjoyed more and why? (2)

8. Long answer type questions

3 x 4 = 12

- a. How do these cave paintings make Homo sapiens different from the human species before them?
- b. What will happen if work is not divided among those who live in a community? Answer in 3 to 4 sentences.
- c. What made Vasco da Gama's discovery an important and historic one? Explain in 4- 5 sentences.